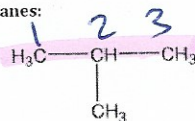


Chemistry 11
Organic Chemistry II Check Point
 ✓ Naming & Drawing Alkanes

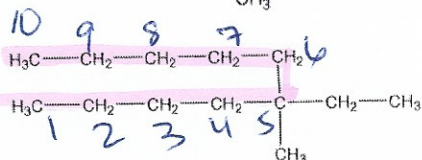
Name:
 Date:
 Block:

Key

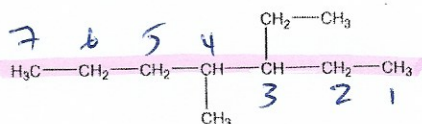
Name the following alkanes:



2-methylpropane




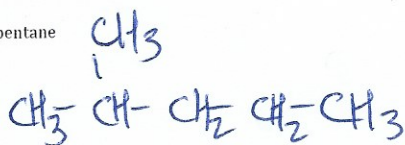
5-ethyl-5methyl
 decane



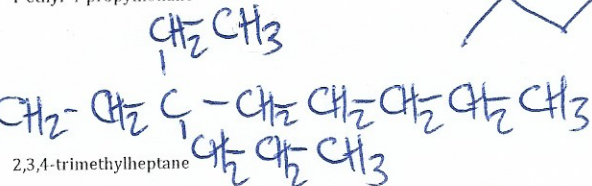
3-ethyl-4-methyl
 heptane.

Draw the following alkanes:

2-methylpentane



4-ethyl-4-propylnonane



2,3,4-trimethylheptane

