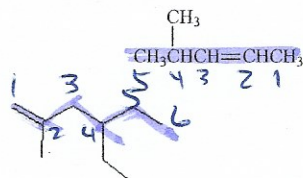
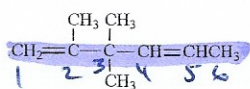


Name the following hydrocarbons:



4-methyl-2-pentene

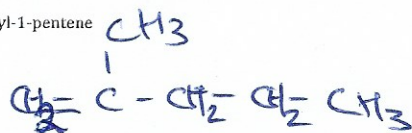


4-ethyl-2-methyl-1-hexene


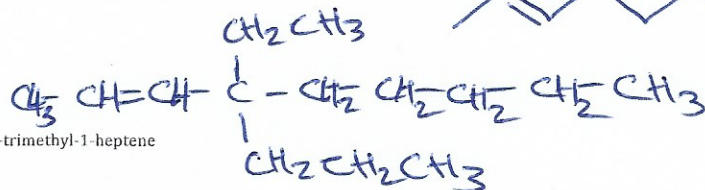
2,3,3-trimethyl-1,4-hexadiene

Draw the following hydrocarbons:

2-methyl-1-pentene



4-ethyl-4-propyl-2-nonene



2,3,4-trimethyl-1-heptene

