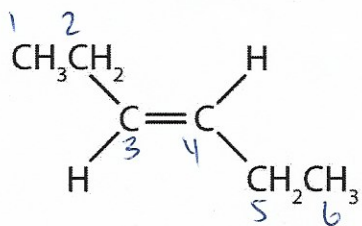


Chemistry 11
Organic Chemistry II Check Point

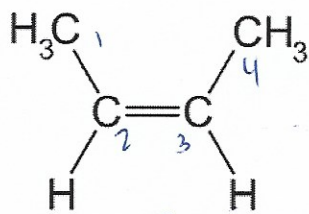
✓ Naming & Drawing Isomers

Name: Key
Date:
Block:

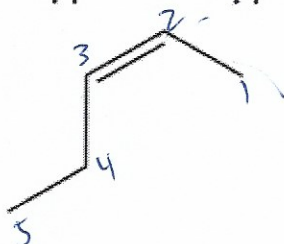
Name the following isomers:



trans-3-hexene



cis-2-butene



cis-2-pentene

Draw the following isomers:

isomers of butane (hint: there should be two)

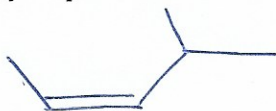


butane



2-methylpropane

cis-4-methyl-2-pentene



trans-3-hexene

