

Organic Chemistry IV Check Point

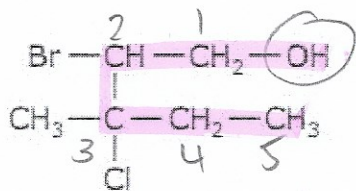
- ✓ Alkyl Halides
- ✓ Alcohols
- ✓ Recognizing Functional Groups

Name: *Keey*

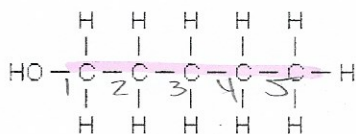
Date:

Block:

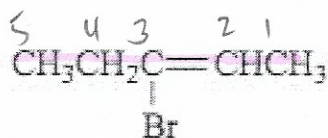
Name the following hydrocarbon:



2-bromo-3-chloro-3-methyl-
1-pentanol



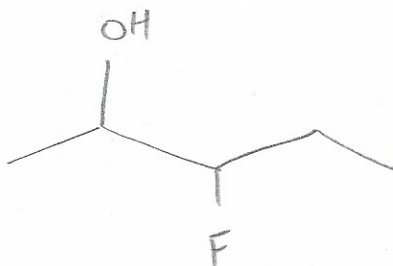
1-pentanol



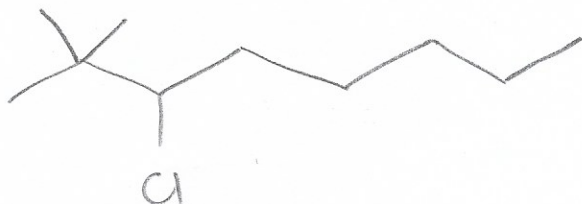
3-bromo-2-pentene

Draw the following hydrocarbon:

3-fluoro-2-pentanol



3-chloro-2,2-dimethyloctane



Circle and identify the functional groups in the following molecules:

